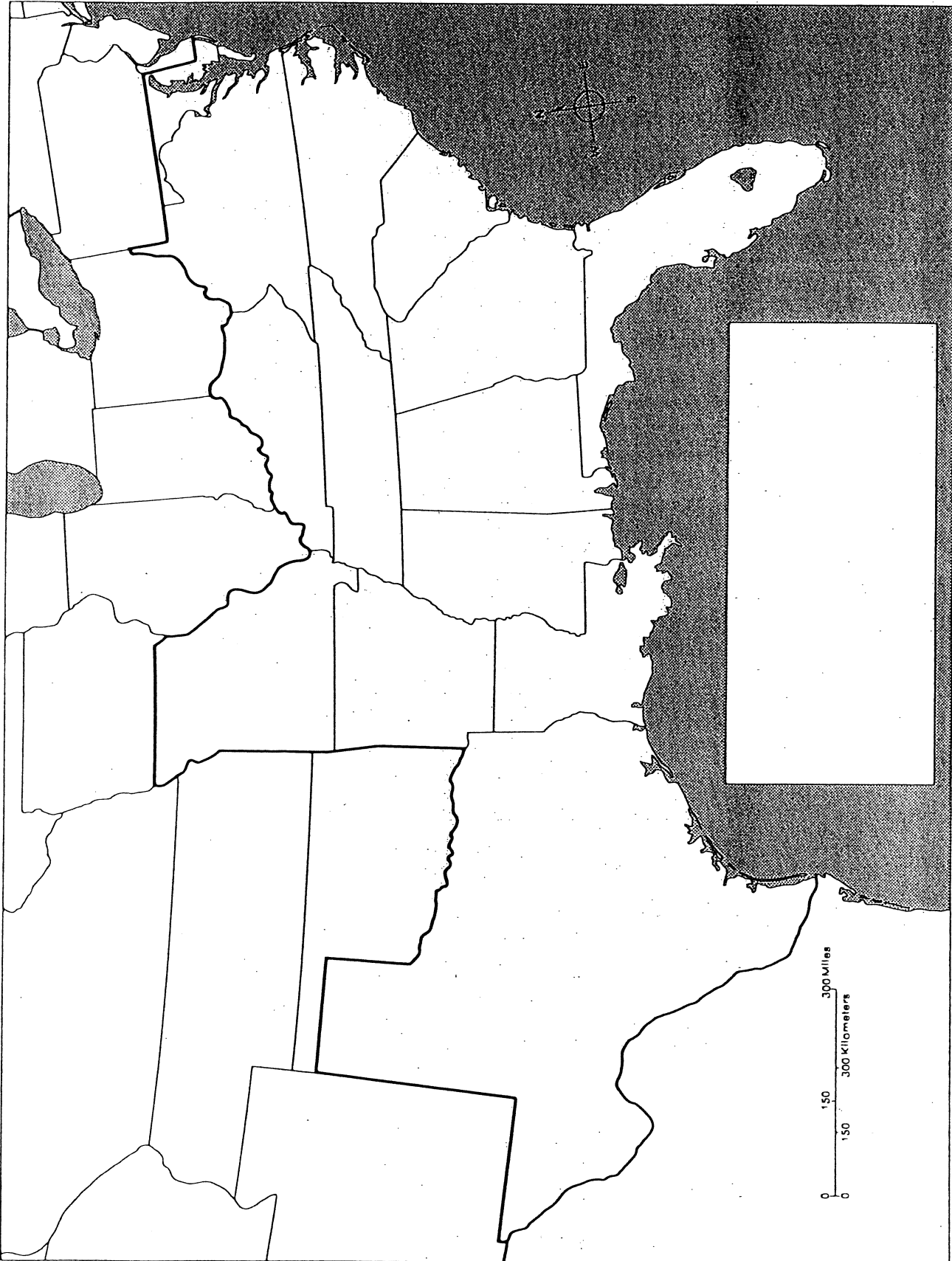


44 The Southern States



Mapping the Southern States

1. STATES


Locate and label the following states:

Maryland	Virginia	Kentucky	North Carolina
South Carolina	Tennessee	Georgia	Alabama
Mississippi	Missouri	Arkansas	Louisiana
Texas	Florida		

***color each state a different color, no two colors touching and NO BLUE.**

2. INDUSTRIES

Use the following symbols and label them on the map. Use the same symbols and create a key in the space provided.



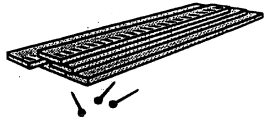
Textiles



Iron and Steel



Mining



Lumber




Cattle



Grain



Cotton



Tobacco



Rice and Sugar

3. TRUE or FALSE

Answer the following questions using your map as a guide.

- True or False Cotton was a major industry in Kentucky.
- True or False Cattle was a major industry in Texas.
- True or False Tobacco was raised mainly in the western states.
- True or False Rice and sugar can were not grown in the south.
- True or False Mining was not part of the southern industries.

4. CRITICAL THINKING

Answer the following questions using your map as a guide.

- How does the map support the statement: "Cotton was king in the South"?
- Compare the map on Page 375 to this one. How do the economies of the North and South differ?